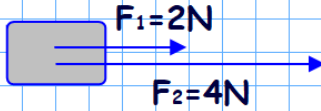
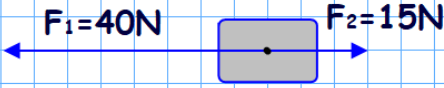


Zadanie 1. Oblicz i narysuj wartość siły wypadkowej.

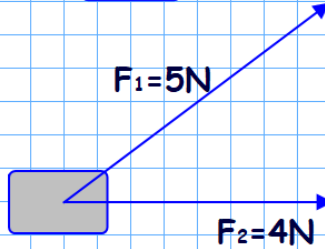
a)



b)

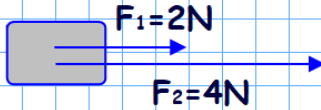


c)



Zadanie 2. Oblicz i narysuj wartość siły równoważącej.

a)



b)



c)

